



My name is: \_\_\_\_\_.




Grade Two ( )

25

Fourth Math Assessment

Date: 22<sup>nd</sup> December 2025

Q1) How many apples are in each box? Write the number down. [3 marks]



Q2) Skip count forward by 3s.

[3 marks]

3 , 6 , \_\_\_\_\_ , 12 , \_\_\_\_\_ , \_\_\_\_\_ , 21

Q3) Skip count forward by 10s.

[3 marks]

10 , 20 , \_\_\_\_\_ , 40 , \_\_\_\_\_ , 60 , \_\_\_\_\_

Q4) Count forward. [3 marks]

20	21			24		26
----	----	--	--	----	--	----

Q5) Count backward. [3 marks]

41	40			37		35
----	----	--	--	----	--	----

Q6) Look at the calendar below. Find the circle around a date.  
Then, write that date in the box. [3 marks]

DECEMBER 2025						
SUNDAY	MONDAY	TUESDAY	WEDNESDAY	THURSDAY	FRIDAY	SATURDAY
	1	2	3	4	5	6
7	8	9	10	11	12	13
14	15	16	17	18	19	20
21	22	23	24	25	26	27
28	29	30	31			

..... / ..... / .....

Q7) Circle the greater number.

[2 marks]

25 or 45

63 or 50

Q8) Circle the least number.

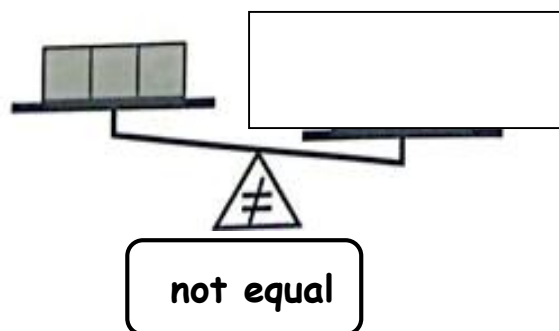
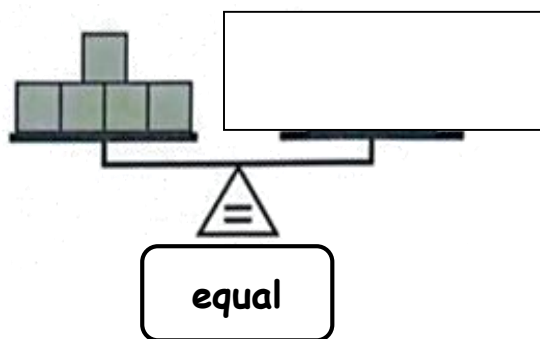
[2 marks]

44 or 22

12 or 21

Q9) Draw blocks to make the amounts.

[1 mark]



Q10) Find out each sum.

[2 marks]

a.  $5 + 5 =$

c.  $7 + 5 =$

b.  $4 + 6 =$

d.  $3 + 9 =$

