

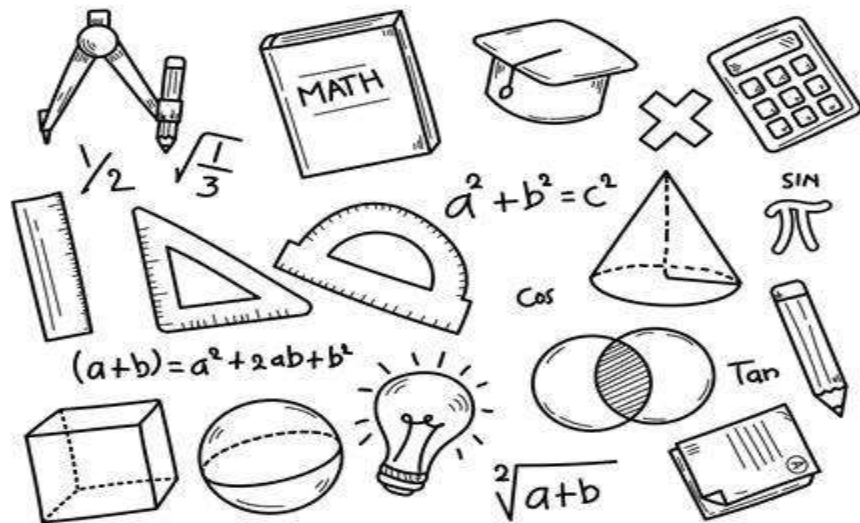


Math Booklet

First Semester

Grade Two

2025/2026



Name: _____

Grade 2 (____)



**Math
Department**

Chapter 2/ Lesson 7+8

Outcomes: Represent week, month, and year.

Date: / /

Exercise 1: Write the date for each calendar for 2024:

January

S	M	T	W	T	F	S
1	2	3	4	5	6	7
8	9	10	11	12	13	14
15	16	17	18	19	20	21
22	23	24	25	26	27	28
29	30	31				

January, 13th

June

S	M	T	W	T	F	S
				1	2	3
4	5	6	7	8	9	10
11	12	13	14	15	16	17
18	19	20	21	22	23	24
25	26	27	28	29	30	

June, 26th

October

S	M	T	W	T	F	S
1	2	3	4	5	6	7
8	9	10	11	12	13	14
15	16	17	18	19	20	21
22	23	24	25	26	27	28
29	30	31				

October, 5th

December

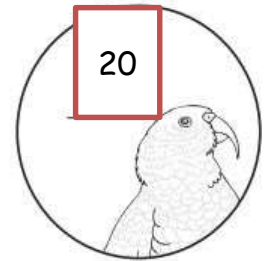
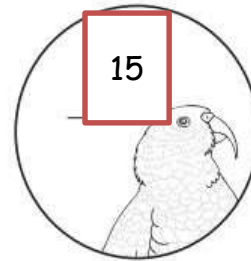

S	M	T	W	T	F	S
					1	2
3	4	5	6	7	8	9
10	11	12	13	14	15	16
17	18	19	20	21	22	23
24	25	26	27	28	29	30
31						

December, 19th







Exercise 1: Complete each pattern:






1.



2.



3.





Math Department

Chapter 2/ Lesson 11





Outcomes: Show greater and least numbers.

Date: / /

Exercise 1: Count and compare using the signs $>$, $<$, or $=$



1.

 <div>15</div>	<div>$>$</div>	<div>13</div> 
---	------------------------------	---

2.

 <div>9</div>	<div>$>$</div>	<div>8</div> 
--	------------------------------	--

3.

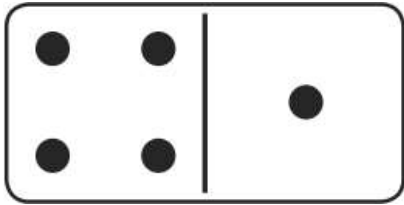


 <div>10</div>	<div>$=$</div>	<div>10</div> 
---	---------------------------	---




4.




 <div>15</div>	<div>$>$</div>	<div>13</div> 
--	------------------------------	---

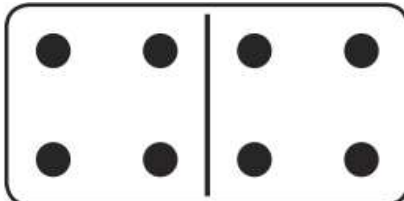
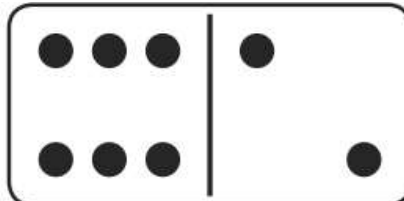



Exercise 1: Solve:

1.  +  = 

2.  +  = 

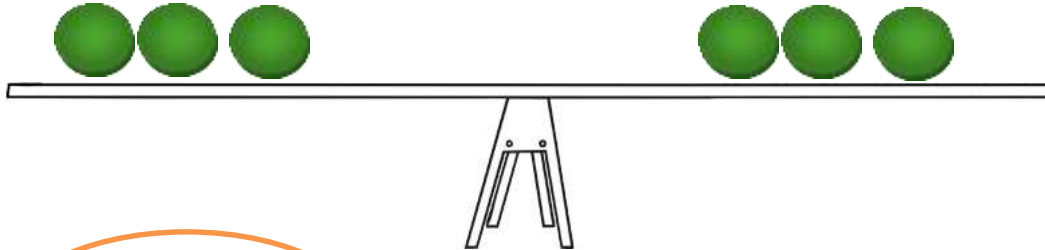
3.  +  = 

4.  +  = 



Exercise 1: Draw and circle the correct answer:

1.



a. equal

b. unequal


2.



a. equal

b. unequal

3.



a. equal

b. unequal





